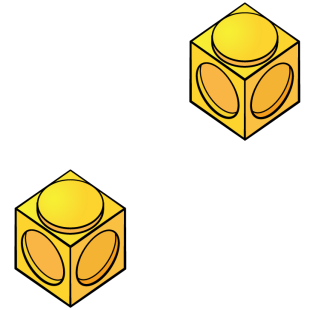




1) How many pears?



2) How many fingers?



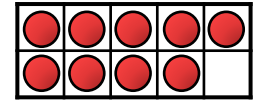
3) Who is taller?



Mo

Eva

4) 1, 2, 3, 4,



1) How many dots? 

2) I brush my teeth \_\_\_\_\_ I go to bed.

before

after

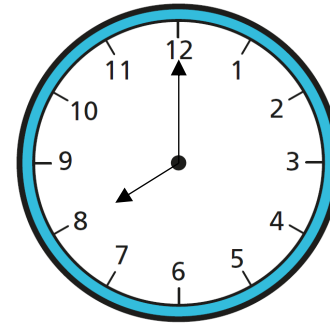
3) How many coins are 2p coins?



4) What is half of 8? 

$$3 \times 2$$

- 1) How many tens are there in 67?
- 2) How many minutes are there in 1 hour?
- 3) Write the time shown on the clock.
- 4) Add 12 and 27 together.




$$3 \times 2$$

1) How many boys went to the park at the weekend?

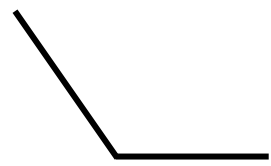
	Girls	Boys
Saturday	52	46
Sunday	37	35

2) How many more goals did Alex score than Jack?

Name	Goals scored
Alex	
Jack	

Key  
 = 2 goals

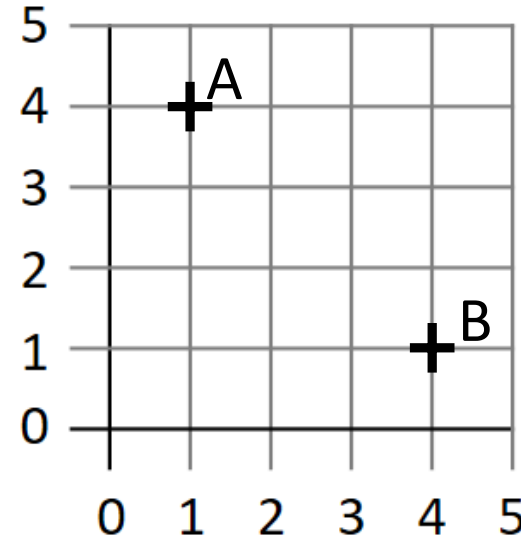
3) Which type of angle is this?





4) What is 32 divided by 8?

VI

1) Write the coordinates of points A and B.



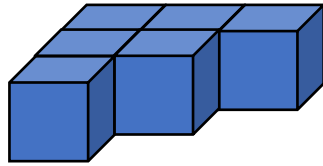
2) Describe the movement from point A to B.

3) In a pictogram, if  is equal to 20 children then  is equal to  children .

4)  $6,485 - 3 \text{ thousands, } 4 \text{ tens and } 5 \text{ ones} =$

XII

- 1) How many cubes make up this shape?



cubes

- 2) How many grams are in  $\frac{1}{2}$  a kilogram?

- 3) What is 9 subtract 15?

- 4) What fraction is shaded?

